

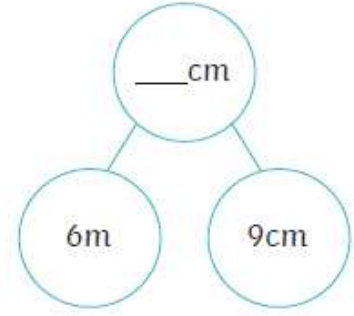
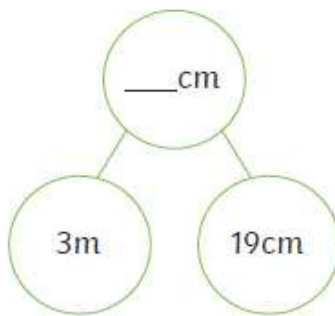
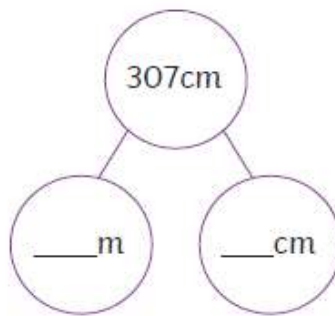
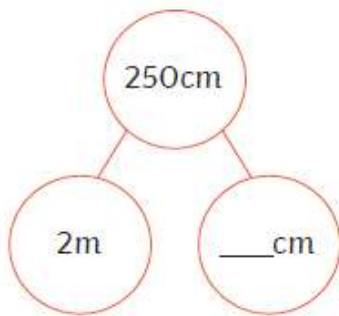
Tuesday 2nd February Maths Task Year 3

Equivalent Lengths (m and cm)

Task 1: Complete the missing measurements.

cm	=	m
200	=	
	=	5
900	=	
	=	3

Task 2: Complete the part-whole models.



Task 3: Can you complete the charts below?

m and cm	↔	cm
6m and 48cm		cm
		416cm
9m and 64cm		cm
		589cm
0m and 98cm		cm

m	↔	cm
1m and 88cm		cm
		564cm
0m and 49cm		cm
		82cm
3m and 36cm		cm


Task 4: Challenge

Amanda and Frances are racing cars down a ramp.



My car travelled 2m and 19cm.

My car travelled 209cm. That's further than yours.



Do you agree with Frances? Give your reasons.
