


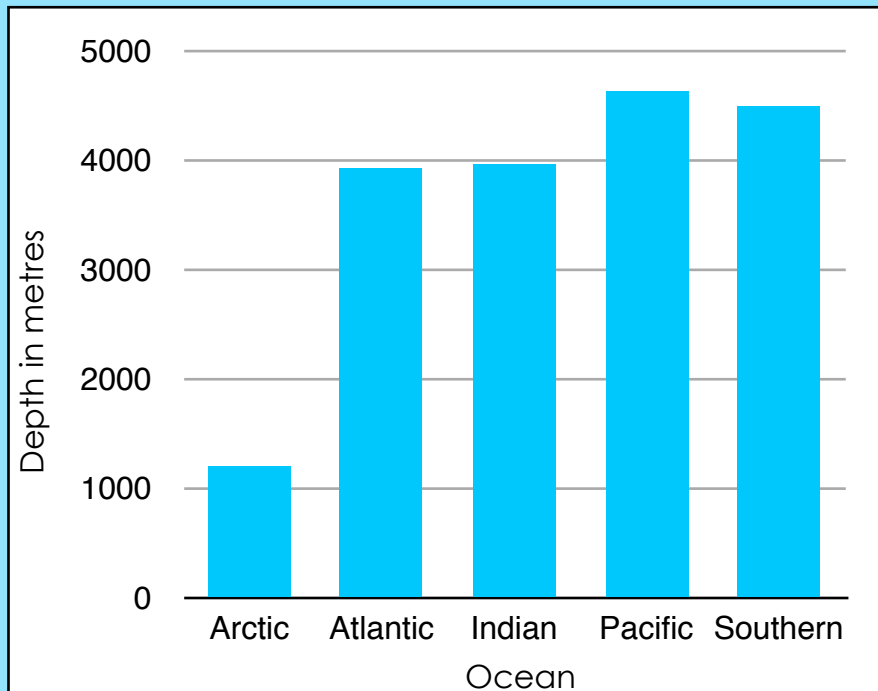
The Oceans

A chart showing the size in area of the oceans (to the nearest million km²)

Arctic Ocean	Atlantic Ocean	Indian Ocean	Pacific Ocean	Southern Ocean
14 million km ²	106 million km ²	74 million km ²	165 million km ²	20 million km ²



A graph showing the average depths of the oceans




A chart showing the deepest point in each ocean

	Arctic Ocean	Atlantic Ocean	Indian Ocean	Pacific Ocean	Southern Ocean
Location	Arctic Basin	Puerto Rico Trench	Java Trench	Mariana Trench	South Sandwich Trench
Depth	5,625m	8,800m	7,724m	10,911m	7,235m


Name: _____ Date: _____

Read the Information Sheet carefully then use the data to answer these questions:




Which ocean has the largest area?

Which ocean has the smallest area?





Which ocean has an area of 106 million km²?

Which of the oceans is on average the deepest?



How deep on average is the Indian Ocean?

The Pacific Ocean has the deepest point on Earth at the Mariana Trench. How deep is this?



Which ocean has a deepest point of 7235m and where is this point found?